




20% OFF!
BEFORE: \$17
NOW: \$14



10%

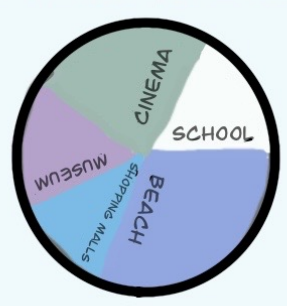


PERCENTAGE %

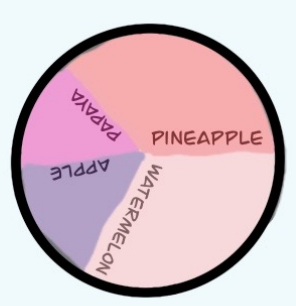
100%



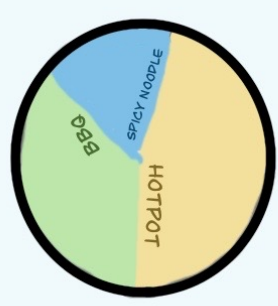
MY FAVORITE PLACES



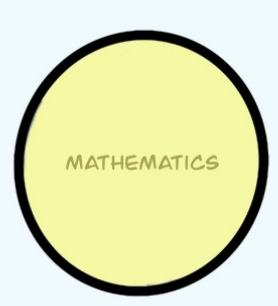
MY FAVORITE FRUITS



MY FAVORITE FOOD



MY FAVORITE SUBJECT



Question 1

Write 55 g as a percentage of 2.2 kg.

[2]

$$\frac{55 \text{ g} \times 100}{2200 \text{ g}} = \frac{1}{40} \times 100 = 2.5\%$$

Question 2

Work out 85 cents as a percentage of \$2.03.

[1]

$$\frac{85}{203} \times 100 = 41.87\%$$

Question 3

From a sample of 80 batteries, 3 are faulty.

Work out the percentage of faulty batteries.

[1]

$$\frac{3}{80} \times 100 = 3.75\%$$

Question 4

Jasjeet and her brother collect stamps.

When Jasjeet gives her brother 1% of her stamps, she has 2475 stamps left.

Calculate how many stamps Jasjeet had originally.

[3]

$$99\% = 2475$$

$$1\% = \frac{2475}{99}$$

$$100\% = \frac{2475}{99} \times 100 = 2500$$

Question 5

In a sale, the cost of a coat is reduced from \$85 to \$67.50.

Calculate the percentage reduction in the cost of the coat.

[3]

$$100 - \frac{67.5 \times 100}{85} = 20.59\%$$

$$\% \text{ decrease} = \frac{17.5}{85} \times 100 = 20.59\%$$

Question 6

The population of Dubai at the end of 2012 was 2.1 million.
This was predicted to increase at a rate of 6% each year.

Calculate the predicted population of Dubai at the end of 2015.

[3]

$$2.1 \left(1 + \frac{6}{100}\right)^3 = 2.5 \text{ million}$$

Question 7

Anita buys a computer for \$391 in a sale.
The sale price is 15% less than the original price.

Calculate the original price of the computer.

[3]

$$x - x \times \frac{15}{100} = 391$$

(or) $x = \$460$

$$85\% = 391$$
$$100\% = \frac{391}{85} \times 100 = 460$$

Question 8

Calculate 17.5% of 44kg.

[2]

$$44 \times \frac{17.5}{100} = 7.7 \text{ kg}$$

Question 9

Emily invests \$ x at a rate of 3% per year simple interest.
After 5 years she has \$20.10 interest.

[3]

Find the value of x .

$$I = \frac{Prt}{100}$$
$$20.10 = \frac{x \times 3 \times 5}{100}$$
$$x = 134$$

Question 10

In 2012 the cost of a ticket to an arts festival was \$30.

This was 20% more than the ticket cost in 2011.

[3]

Calculate the cost of the ticket in 2011.

$$x \left(1 + \frac{20}{100} \right) = 30$$

$$120\% = \$30 \quad (\text{or}) \quad x = \$25$$

$$100\% = \$25$$

Question 11

The Tiger Sky Tower in Singapore has a viewing capsule which holds 72 people. This number is 75% of the population of Singapore when it was founded in 1819. What was the population of Singapore in 1819?

[2]

$$x \times \frac{75}{100} = 72$$

$$x = 96$$

(or)

$$75\% = 72 \text{ people}$$

$$100\% = 96 \text{ people}$$

Question 12

Samantha invests \$600 at a rate of 2% per year simple interest.

[2]

Calculate the interest Samantha earns in 8 years.

$$\begin{aligned} I &= \frac{Prt}{100} \\ &= \frac{600 \times 2 \times 8}{100} \\ &= 96 \$ \end{aligned}$$

Question 13

Maria pays \$84 rent.
The rent is increased by 5%.

[2]

Calculate Maria's new rent.

$$84 \left(1 + \frac{5}{100} \right) = 88.2$$

(or)

$$84 \times 105\% = 88.2$$

Question 1

Shania invests \$750 at a rate of $2\frac{1}{2}\%$ per year simple interest.

Calculate the **total** amount Shania has after 5 years.

[3]

$$I = \frac{Prt}{100}$$

$$= \frac{750 \times 2.5 \times 5}{100} = 93.75$$

$$\text{total amount} = 843.75 \$$$

Question 2

The taxi fare in a city is \$3 **and** then \$0.40 for every kilometre travelled.

(a) A taxi fare is \$9.

[2]

How far has the taxi travelled?

$$\frac{9-3}{0.4} = \frac{60}{4} = 15 \text{ km}$$

(b) Taxi fares cost 30 % more at night.

How much does a \$9 daytime journey cost at night?

[2]

$$9 \times 1.3 = \$11.7$$

Question 3

Hans invests \$750 for 8 years at a rate of 2% per year simple interest.

[2]

Calculate the interest Hans receives.

$$\begin{aligned} I &= \frac{Prt}{100} \\ &= \frac{750 \times 2 \times 8}{100} \\ &= 120 \$ \end{aligned}$$

Question 4

Maria decides to increase her homework time of 8 hours per week by 15%.

Calculate her new homework time.

Give your answer in hours and minutes.

[3]

$$8 + \frac{8 \times 15}{100} = 9.2 \text{ hr}$$

9 hours and 12 minutes

Question 5

During a marathon race an athlete loses 2 % of his mass.
At the end of the race his mass is 67.13 kg.

Calculate his mass before the race.

[3]

$$x - \frac{x \times 2}{100} = 67.13$$

$$(or) \quad x = 68.5 \text{ kg}$$

$$98\% = 67.13 \text{ kg}$$

$$100\% = 68.5 \text{ kg}$$

The Maths Society

Question 6

A concert hall has 1540 seats.

Calculate the number of people in the hall when 55% of the seats are occupied.

[1]

$$1540 \times 0.55 = 847$$

Question 7

In 1970 the population of China was 8.2×10^8 .

In 2007 the population of China was 1.322×10^9 .

Calculate the population in 2007 as a percentage of the population in 1970.

[2]

$$\frac{1.322 \times 10^9}{8.2 \times 10^8} \times 100$$
$$= 1.612 \times 100 = 161.2\%$$

Question 8

In 2004 Colin had a salary of \$7200.

(a) This was an increase of 20% on his salary in 2002.

Calculate his salary in 2002.

[2]

$$120\% = \$7200$$
$$100\% = \$6000$$

(b) In 2006 his salary increased to \$8100.

Calculate the percentage increase from 2004 to 2006.

[2]

$$\frac{900}{7200} \times 100$$
$$= 12.5\%$$

Question 9

Celine invests \$ 800 for 5 months at 3% simple interest per year.
Calculate the interest she receives.

[2]

$$I = \frac{Prt}{100} = \frac{800 \times 3 \times \frac{5}{12}}{100} \\ = \$10$$

Question 10

Sara has \$3000 to invest for 2 years.
She invests the money in a bank which pays simple interest at the rate of 7.5 % per year.
Calculate how much interest she will have at the end of the 2 years.

[2]

$$I = \frac{Prt}{100} = \frac{3000 \times 7.5 \times 2}{100} \\ = 450$$

Question 11

In 1950, the population of Switzerland was 4 714 900. In 2000, the population was 7 087 000.

- (a) Work out the percentage increase in the population from 1950 to 2000. [2]

$$\frac{7087000 - 4714900}{4714900} \times 100 = 50.3\%$$

- (b) (i) Write the 1950 population correct to 3 significant figures. [1]

$$4710000$$

- (ii) Write the 2000 population in standard form. [1]

$$7.087 \times 10^6$$

Question 12

Nyali paid \$62 for a bicycle. She sold it later for \$46. What was her percentage loss? [2]

$$\begin{aligned} \text{(or)} \quad 100 - \left(\frac{46}{62} \times 100 \right) &= 25.81\% \\ \% \text{ loss} &= \frac{16}{62} \times 100 \\ &= 25.8\% \end{aligned}$$

The Maths Society

Question 1

Indira buys a television in a sale for \$924.
This was a reduction of 12% on the original price.

[3]

Calculate the original price of the television.

$$x - \left(x \times \frac{12}{100}\right) = 924$$
$$x = \$1050$$

(or)

$$88\% = \$924$$

$$100\% = \$1050$$

Question 2

Ahmed paid \$34 000 for a car.
His car decreased in value by 40% at the end of the first year.
The value at the end of the second year was 10% less than the value at the end of the first year.

Calculate the value of Ahmed's car after 2 years.

[2]

After first yr,

$$34000 - \left(34000 \times \frac{40}{100}\right) = 20400$$

After second yr,

$$20400 - \left(20400 \times \frac{10}{100}\right) = 18360$$

Question 3

Hazel invests \$1800 for 7 years at a rate of 1.5% per year compound interest.

Calculate how much interest she will receive after the 7 years.


Give your answer correct to the nearest dollar.

[4]

$$1800 \left(1 + \frac{1.5}{100} \right)^7 - 1800$$

$$= \$197.72$$

$$= \$198 \text{ (nearest dollar)}$$

The logo for 'The Maths Society' features the text 'The Maths Society' in a blue, rounded font. A large red checkmark is positioned behind the text, with its top bar extending over 'The Maths' and its bottom bar under 'Society'.

Question 4


Robert buys a car for \$8000.

At the end of each year the value of the car has decreased by 10% of its value at the beginning of that year.

Calculate the value of the car at the end of 7 years.

[2]

$$8000 \left(1 - \frac{10}{100}\right)^7 = \$3826.38$$



Question 5

Georg invests \$5000 for 14 years at a rate of 2% per year compound interest.

Calculate the interest he receives.

Give your answer correct to the nearest dollar.

[4]

$$\begin{aligned} &5000 \left(1 + \frac{2}{100}\right)^{14} - 5000 \\ &= \$1597.39 \\ &= \$1597 \text{ (nearest dollar)} \end{aligned}$$

The Maths Society

Question 6

Amalie makes a profit of 20% when she sells a shirt for \$21.60.

Calculate how much Amalie paid for the shirt.

[2]

$$x + x \times \frac{20}{100} = 21.60$$

(or) $x = 18$

$$120\% = 21.60$$

$$100\% = \$18$$

Question 7

A student played a computer game 500 times and won 370 of these games.

He then won the next x games and lost none.

He has now won 75% of the games he has played.

Find the value of x .

[4]

$$\text{Lost} = 500 - 370 = 130$$

$$\therefore \text{Lost} = 100 - 75 = 25\%$$

$$25\% - 130$$

$$75\% - 390$$

$$x = 390 - 370 = 20$$

(or)

$$\text{total game} = 500 + x$$

$$0.75 \times (500 + x) = 370 + x$$

$$375 + 0.75x = 370 + x$$

$$5 = 0.25x$$

$$20 = x$$

Question 8

A house was built in 1985 and cost \$62 000.
It was sold in 2003 for \$310 000.

(a) Work out the 1985 price as a percentage of the 2003 price. [2]

$$\frac{62000}{310000} \times 100$$

$$= 20\%$$

$$310000 \times \frac{x}{100} = 62000$$

$$x = 20\%$$

(b) Calculate the percentage increase in the price from 1985 to 2003. [2]

$$\frac{310000 - 62000}{62000} \times 100 = \frac{248000}{62000} \times 100 = 4\%$$

$\% \text{ increase} = \frac{\text{increased amount}}{\text{original}} \times 100$

Question 9

In 1997 the population of China was 1.24×10^9 .
In 2002 the population of China was 1.28×10^9 .
Calculate the percentage increase from 1997 to 2002. [2]

$$\frac{1.28 \times 10^9 - 1.24 \times 10^9}{1.24 \times 10^9} \times 100$$

$$= \frac{0.04 \times 10^9}{1.24 \times 10^9} \times 100 = \frac{400}{124} = 3.23\%$$

The Maths Society

Question 10

Abdul invested \$240 when the rate of simple interest was $r\%$ peryear.
After m months the interest was \$ I .

Write down and simplify an expression for I , in terms of m and r .

[2]

$$\begin{aligned} I &= \frac{Prt}{100} \\ &= \frac{240 \times r \times \frac{m}{12}}{100} \\ &= \frac{rm}{5} \end{aligned}$$

Question 11

A baby was born with a mass of 3.6 kg.
After three months this mass had increased to 6 kg.
Calculate the percentage increase in the mass of the baby.

[2]

$$3.6 \times \frac{x}{100} = 6 - 3.6$$

(or)

$$x = 66.67\%$$

$$\begin{aligned} \% \text{ increase} &= \frac{6 - 3.6}{3.6} \times 100 \\ &= 66.6\% \end{aligned}$$